

Please check the examination details below before entering your candidate information

Candidate surname		Other names	
Pearson Edexcel International Advanced Level		Centre Number	Candidate Number
		<input type="text"/> <input type="text"/> <input type="text"/> <input type="text"/> <input type="text"/>	<input type="text"/> <input type="text"/> <input type="text"/> <input type="text"/>
Monday 14 January 2019			
Afternoon (Time: 2 hours)		Paper Reference WGE03/01	
Geography International Advanced Level Paper 3: Contested Planet			
You must have: Resource Booklet (enclosed)			Total Marks

Instructions

- Use **black** ink or ball-point pen.
- **Fill in the boxes** at the top of this page with your name, centre number and candidate number.
- Answer **ALL** questions in Section A, **ONE** question in Section B and **ONE** question in Section C.
- Answer the questions in the spaces provided
– *there may be more space than you need.*
- Calculators may be used.

Information

- The total mark for this paper is 90.
- The marks for **each** question are shown in brackets
– *use this as a guide as to how much time to spend on each question.*

Advice

- Read each question carefully before you start to answer it.
- Check your answers if you have time at the end.

Turn over ►

P55525A

©2019 Pearson Education Ltd.

1/1/1/1/1/1



Pearson

SECTION A: Compulsory topics and synoptic question

Answer ALL questions in this section. Write your answers in the spaces provided.

A1: Atmosphere and Weather Systems

- 1 Using Figure 1, explain the possible causes **and** impacts of the trends in precipitation shown.

(10)

DO NOT WRITE IN THIS AREA

DO NOT WRITE IN THIS AREA

DO NOT WRITE IN THIS AREA



DO NOT WRITE IN THIS AREA

DO NOT WRITE IN THIS AREA

DO NOT WRITE IN THIS AREA

.....

.....

.....

.....

.....

.....

.....

.....

.....

(Total for Question 1 = 10 marks)



A2: Biodiversity Under Threat

- 2 (a) Using Figure 2, suggest reasons for the differences in importance of ecosystem services at global and local scales.

(10)

DO NOT WRITE IN THIS AREA

DO NOT WRITE IN THIS AREA

DO NOT WRITE IN THIS AREA



DO NOT WRITE IN THIS AREA

DO NOT WRITE IN THIS AREA

DO NOT WRITE IN THIS AREA

Handwriting practice lines consisting of seven horizontal dotted lines.



- (b) Evaluate the relative importance of local and global threats to the biodiversity of a named terrestrial biome.

(15)

Named terrestrial biome



DO NOT WRITE IN THIS AREA

DO NOT WRITE IN THIS AREA

DO NOT WRITE IN THIS AREA

(Total for Question 2 = 25 marks)



P 5 5 5 2 5 A 0 7 2 4

Synoptic question

You should use relevant knowledge and understanding from Unit 1 and Unit 3 (topics A1 and A2) to answer this question.

- 3** To what extent does being 'switched off' from globalisation increase people's risk from extreme weather hazards?

(15)



DO NOT WRITE IN THIS AREA

DO NOT WRITE IN THIS AREA

DO NOT WRITE IN THIS AREA

(Total for Question 3 = 15 marks)

TOTAL FOR SECTION A = 50 MARKS



DO NOT WRITE IN THIS AREA

DO NOT WRITE IN THIS AREA

DO NOT WRITE IN THIS AREA

(20)

[illegible]

DO NOT WRITE IN THIS AREA

DO NOT WRITE IN THIS AREA

DO NOT WRITE IN THIS AREA

Handwriting practice area with 20 horizontal dotted lines.



P 5 5 5 2 5 A 0 1 1 2 4

DO NOT WRITE IN THIS AREA

DO NOT WRITE IN THIS AREA

DO NOT WRITE IN THIS AREA

(Total for Question 4 = 20 marks)



DO NOT WRITE IN THIS AREA

DO NOT WRITE IN THIS AREA

- DO NOT WRITE IN THIS AREA**



DO NOT WRITE IN THIS AREA

DO NOT WRITE IN THIS AREA

DO NOT WRITE IN THIS AREA



DO NOT WRITE IN THIS AREA

DO NOT WRITE IN THIS AREA

DO NOT WRITE IN THIS AREA

.....

.....

.....

.....

.....

.....

.....

.....

.....

.....

.....

.....

.....

.....

(Total for Question 5 = 20 marks)

TOTAL FOR SECTION B = 20 MARKS



SECTION C: Economic and Political options

Answer ONE question in this section – EITHER Question 6 OR Question 7.

If you answer Question 6 put a cross in the box ☐ .

Write your answers in the spaces provided.

C1: Superpower Geographies

6 (a) Using Figure 3, suggest why TNCs are important to the status of superpowers.

(5)

.....

.....

.....

.....

.....

.....

.....

.....

.....

.....

DO NOT WRITE IN THIS AREA

DO NOT WRITE IN THIS AREA

DO NOT WRITE IN THIS AREA



DO NOT WRITE IN THIS AREA

DO NOT WRITE IN THIS AREA

DO NOT WRITE IN THIS AREA

(b) Using named examples, assess the global impacts of increasing middle-class resource consumption in emerging superpowers.

(15)

Handwriting practice area with 20 horizontal dotted lines.



DO NOT WRITE IN THIS AREA

DO NOT WRITE IN THIS AREA

DO NOT WRITE IN THIS AREA

(Total for Question 6 = 20 marks)



DO NOT WRITE IN THIS AREA

DO NOT WRITE IN THIS AREA

DO NOT WRITE IN THIS AREA

If you answer Question 7 put a cross in the box ☐ .

C2: Bridging the Development Gap

- 7 (a) Using Figure 4, suggest reasons for the differences in monthly income between the three ethnic groups.

(5)

.....

.....

.....

.....

.....

.....

.....

.....

.....

.....



(b) Using named examples, assess how far trade contributes to the size of the global development gap.

(15)

DO NOT WRITE IN THIS AREA

DO NOT WRITE IN THIS AREA

DO NOT WRITE IN THIS AREA



DO NOT WRITE IN THIS AREA

DO NOT WRITE IN THIS AREA

DO NOT WRITE IN THIS AREA

(Total for Question 7 = 20 marks)

TOTAL FOR SECTION C = 20 MARKS
TOTAL FOR PAPER = 90 MARKS



DO NOT WRITE IN THIS AREA

DO NOT WRITE IN THIS AREA

DO NOT WRITE IN THIS AREA

BLANK PAGE



DO NOT WRITE IN THIS AREA

DO NOT WRITE IN THIS AREA

DO NOT WRITE IN THIS AREA

BLANK PAGE



DO NOT WRITE IN THIS AREA

DO NOT WRITE IN THIS AREA

DO NOT WRITE IN THIS AREA

BLANK PAGE



Pearson Edexcel International Advanced Level

Monday 14 January 2019

Afternoon (Time: 2 hours)

Paper Reference **WGE03/01**

Geography

International Advanced Level

Paper 3: Contested Planet

Resource Booklet

Do not return this Resource Booklet with the question paper.

Turn over ►

P55525A

©2019 Pearson Education Ltd.

1/1/1/1/1

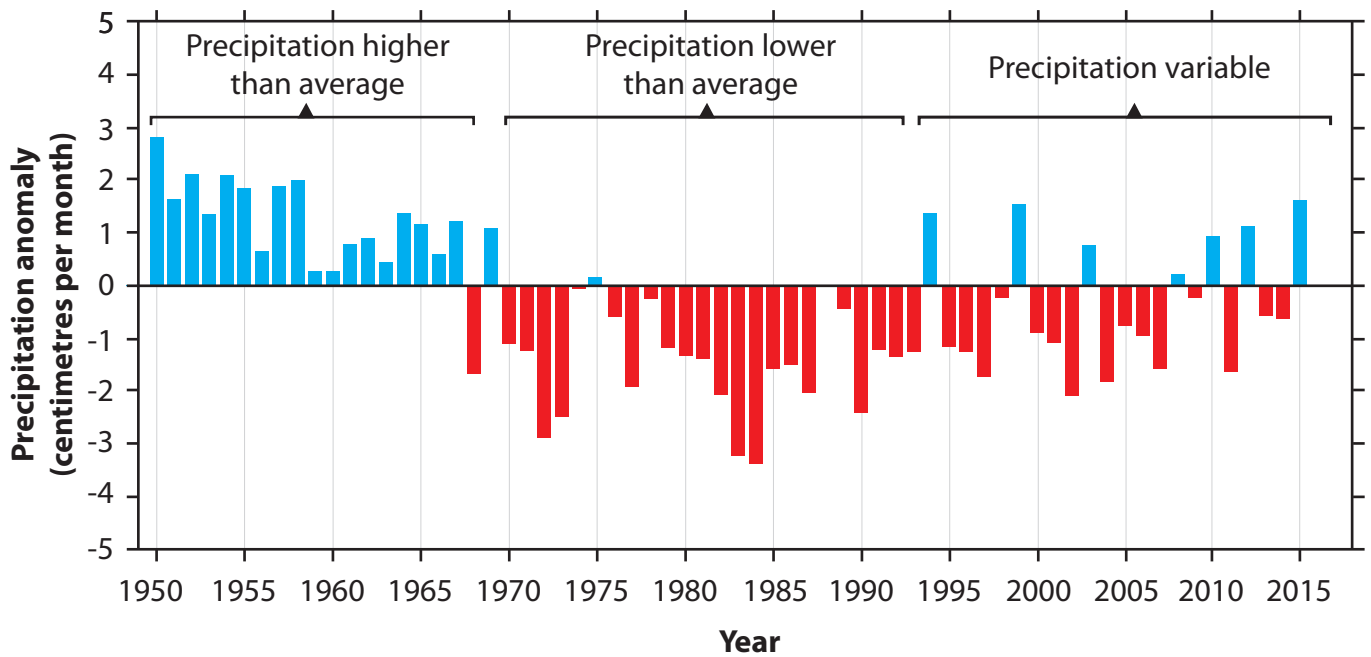


Pearson

SECTION A

A1: Atmosphere and Weather Systems

The following resource relates to Question 1.





Precipitation anomalies are variations from the average expected rainfall.

Figure 1

Precipitation anomalies in the Sahel, Africa 1950–2015

A2: Biodiversity Under Threat

The following resource relates to Question 2.

Type of ecosystem service	Global scale	Local scale
		
Provisioning services	1	4
Cultural services	2	4
Regulating services	5	3

Level of importance of ecosystem service:



Figure 2

The importance of different ecosystem services at global and local scales

SECTION C

C1: Superpower Geographies

The following resource relates to Question 6.

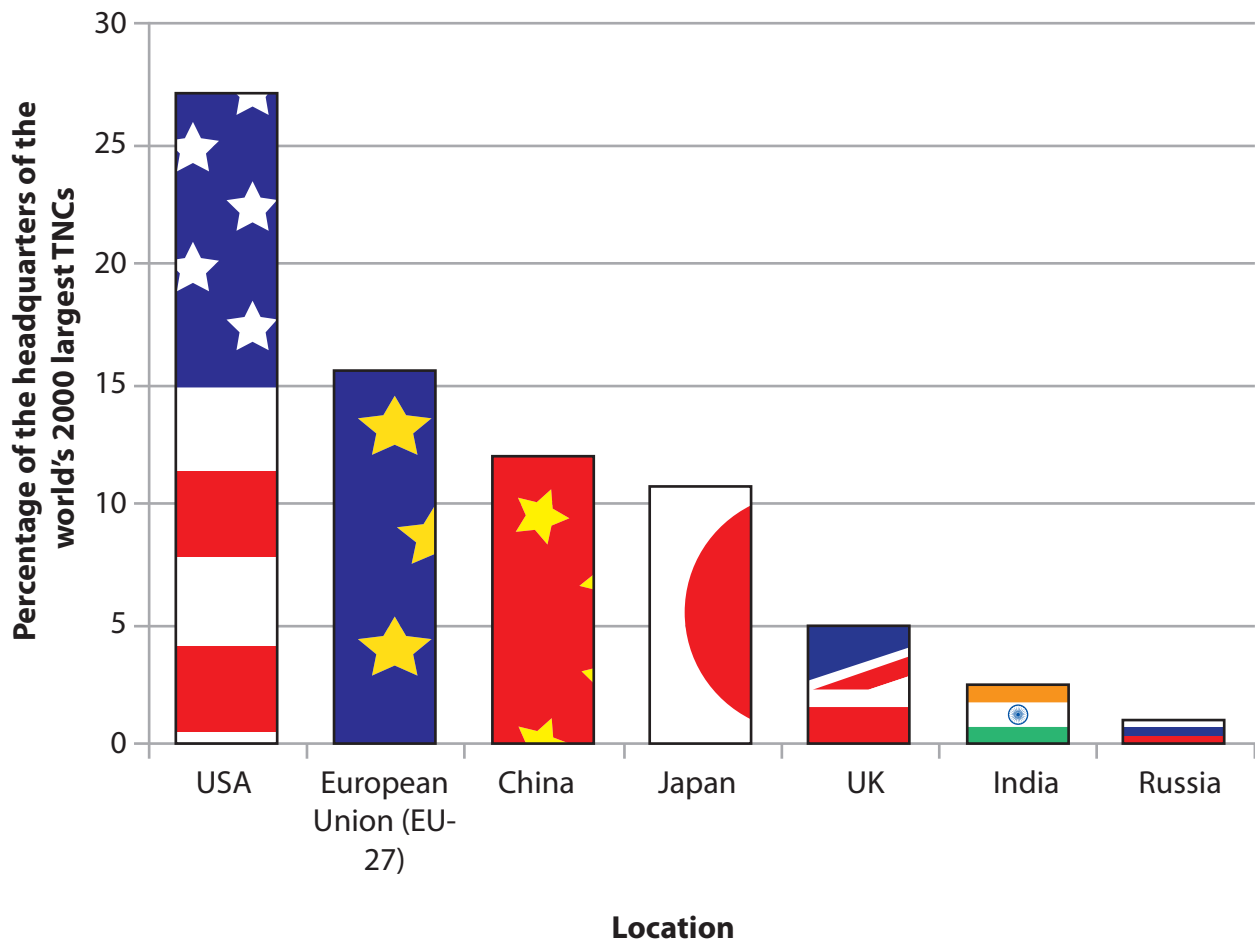


Figure 3

The locations of the headquarters of the world's 2000 largest TNCs in 2016

C2: Bridging the Development Gap

The following resource relates to Question 7.



R\$ = Brazilian real, the currency of Brazil

Indigenous Brazilians are descendants of the original or 'native' population of Brazil

Figure 4

Average monthly income for three ethnic groups in Brazil, 2010

BLANK PAGE

BLANK PAGE

BLANK PAGE